



UNIVERSITY OF CAMBRIDGE INTERNATIONAL EXAMINATIONS  
General Certificate of Education Advanced Subsidiary Level and Advanced Level

---

**GEOGRAPHY**

**9696/32**

Paper 3 Advanced Human Options

**May/June 2013**

INSERT

**1 hour 30 minutes**

---

**READ THESE INSTRUCTIONS FIRST**

This Insert contains all the Figures, the Table and the Photograph referred to in the questions.

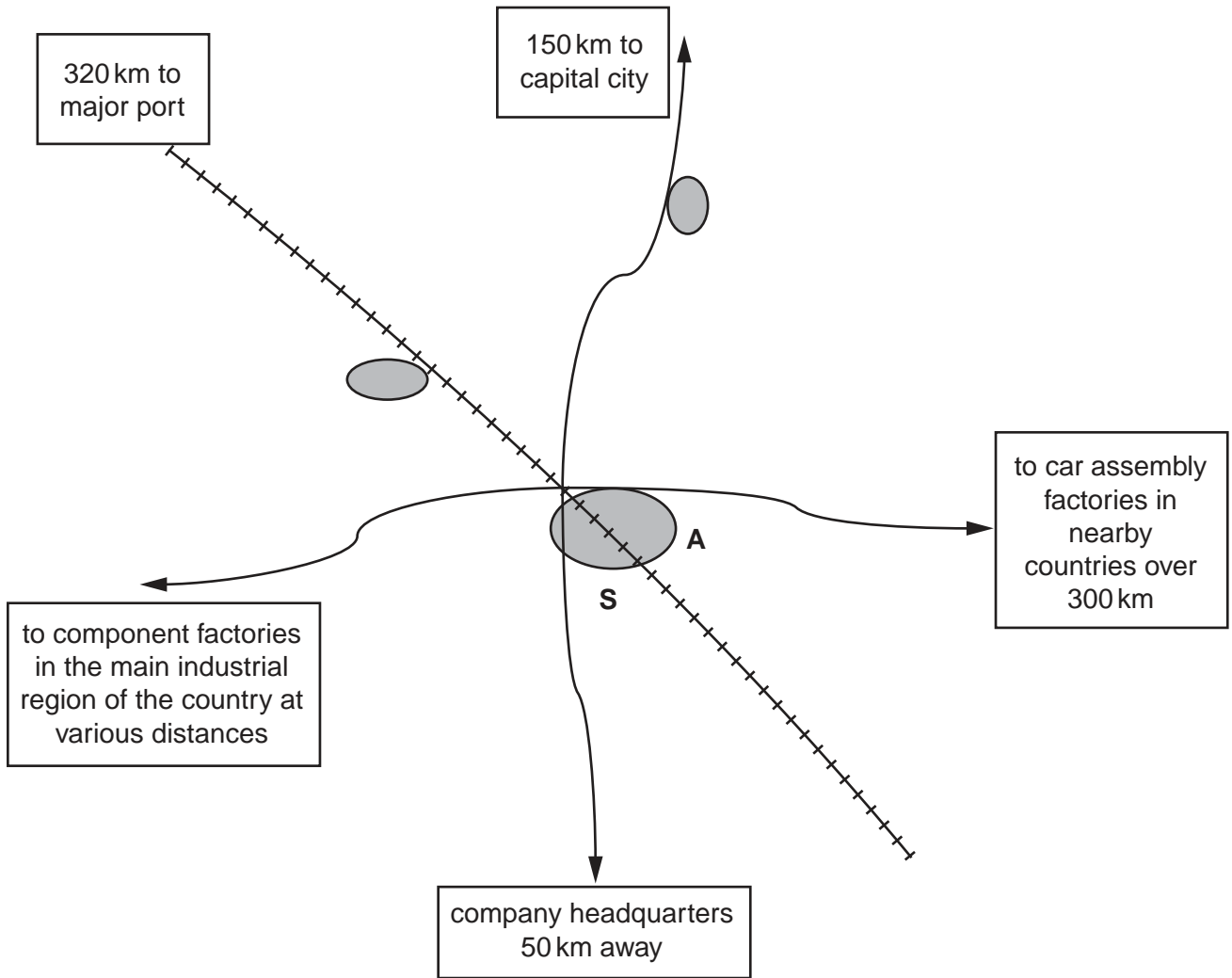
---

This document consists of **4** printed pages.



Fig. 1 for Question 2

The location of a new factory for the manufacture of luxury cars



**Key**




- large industrial towns and cities 
- site of factory **S**
- major roads 
- high-speed rail link 
- airport **A**

Table 1 for Question 3

**Consumption of natural gas and nuclear power by world region in 2007**

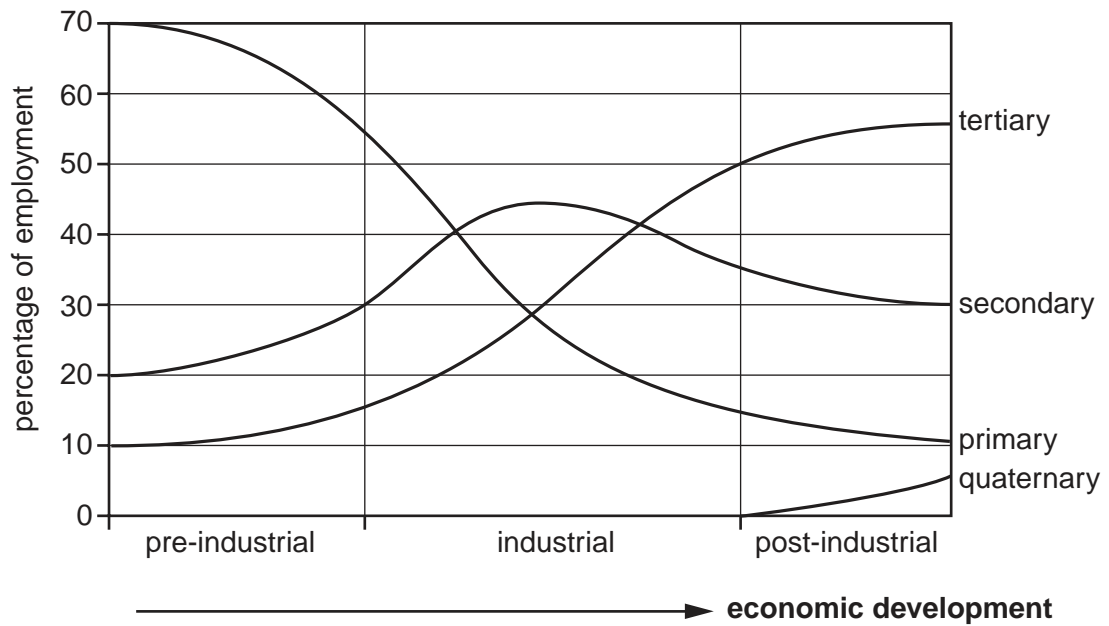
world region, 2007	world consumption of natural gas (%)	world consumption of nuclear power (%)
North America	27.6	34.7
Europe and Eurasia (including Russia)	39.4	44.3
Asia Pacific	15.3	19.8
Rest of the world	17.7	1.2

Photograph A for Question 6

**A popular tourist destination in Europe**

Fig. 2 for Question 8

## The sector model



Permission to reproduce items where third-party owned material protected by copyright is included has been sought and cleared where possible. Every reasonable effort has been made by the publisher (UCLES) to trace copyright holders, but if any items requiring clearance have unwittingly been included, the publisher will be pleased to make amends at the earliest possible opportunity.

University of Cambridge International Examinations is part of the Cambridge Assessment Group. Cambridge Assessment is the brand name of University of Cambridge Local Examinations Syndicate (UCLES), which is itself a department of the University of Cambridge.